










Exploration of Weight


6th Class Maths




Look at the following weighing instruments.

Can you identify something that can be weighed on each and explain your answer.

	<hr/> <hr/> <hr/> <hr/> <hr/> <hr/>		<hr/> <hr/> <hr/> <hr/> <hr/> <hr/>
	<hr/> <hr/> <hr/> <hr/> <hr/> <hr/>		<hr/> <hr/> <hr/> <hr/> <hr/> <hr/>
	<hr/> <hr/> <hr/> <hr/> <hr/> <hr/>		<hr/> <hr/> <hr/> <hr/> <hr/> <hr/>
	<hr/> <hr/> <hr/> <hr/> <hr/> <hr/>		<hr/> <hr/> <hr/> <hr/> <hr/> <hr/>



Exploration of Weight Answers



Look at the following weighing instruments.

Can you identify something that can be weighed on each and explain your answer.

	Person, myself		Babies
	Food, flour, butter, pasta, rice etc.		Fruit, vegetables, sweets
	Luggage		Animals
	Vehicles		Jewellery, small items